

Symbol 3 (part 2)

Name: _____

1. Joan has two apples and Deon gives her another one. How many apples does Joan have now?

Circle the correct answer.

1● 2●● 3●●●

2. A monkey has four bananas and eats one. How many bananas does he have left?




Circle the correct answer.

1● 2●● 3●●●

3. Thabo has two dogs and gets another one dog from Kabelo. How many dogs does Thabo have altogether?

Circle the correct answer.

1● 2●● 3●●●

4.  +  +  = _____

5. If one cat has one tail, how many tails will three cats have altogether?



1 + 1 + 1 → _____